

Oak class

I hope that you have all had a good week and I'm looking forward to speaking to the year 5s on Thursday. Thank you for the photos I've received this week, as always it's lovely to see what you have been doing and good to see the home learning that you have completed.

I have included some photos of the year 6s work that they have been doing in school.

Mrs Cox.

Within a cave, ferocious, fire-like, yellow eyes stared at him. A deafening, ear-splitting roar echoed through the jungle. He wanted to run but his blood ran cold and his feet froze to the ground. The Dream Caver realised the danger and flicked nervously through the book.

Arriving at the edge of a cliff Olive had no-where else to run. He worriedly turned around to face the terrifying creature which blocked out any possible sunlight. Bone crunching teeth laid inside its monstrous mouth, its big, black, glassy wings flapped as its

The year 6s have been working hard in English and they have produced some super writing. We have also been following the White Rose maths, learning algebra and we had some fun practising some watercolour techniques and decoding Viking runes.

1 Solve the equations.

a) $x + z = 20$ $x = 13$ $z = 7$

b) $10y = 80$ $y = 8$

c) $4m = 22$ $m = 5.5$

d) $z - 3 = 15$ $z = 18$

e) $32 = z - 5$ $z = 37$

f) $\frac{m}{6} = 3$ $m = 18$

2 Dexter builds a tower. Each block is 2m high. He uses 7 blocks.

The total height of his tower is 42 cm.

Write an equation to represent the height of Dexter's tower and find the value of x .

$2x + 2x + 2x + 2x + 2x + 2x + 2x = 42$ $x = 3$ cm

3 Work out the value of each shape. Write the equations that you solved to find the value of each shape.

☆	♥	☆	♥
☆	▲	☆	☆
♥	♥	♥	♥
▲	☆	♥	▲

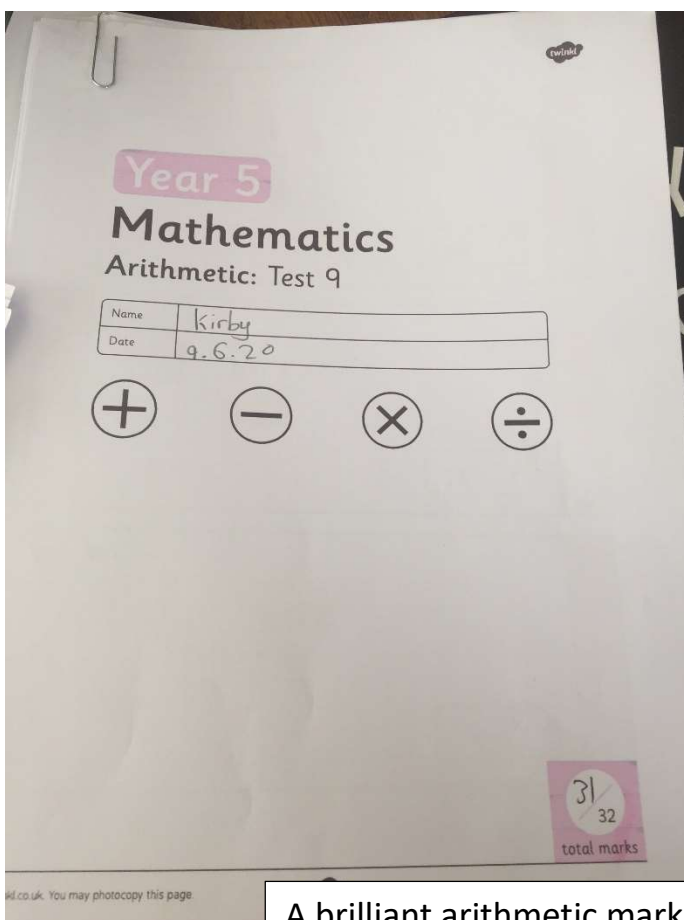
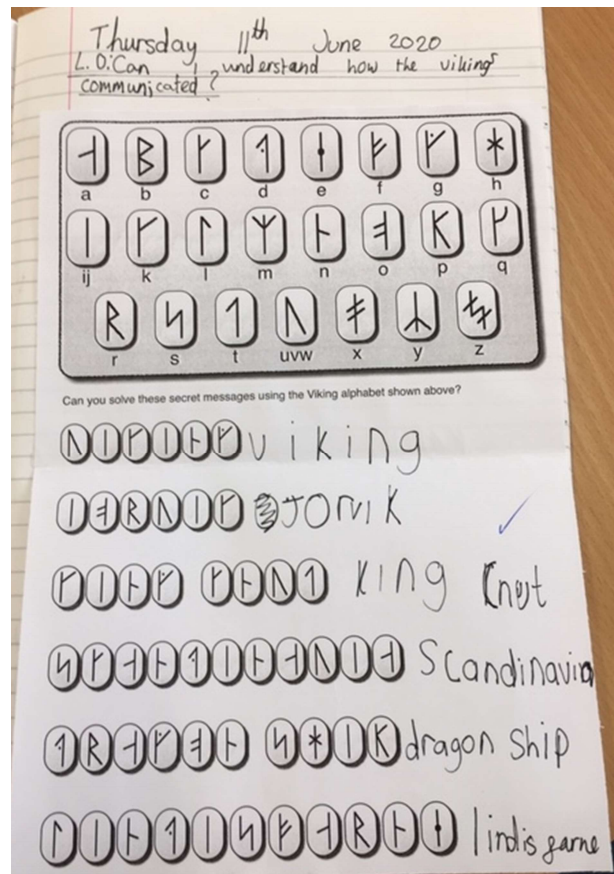
$40 = 4 \times \text{♥}$

$20 = 4 \times \text{▲}$

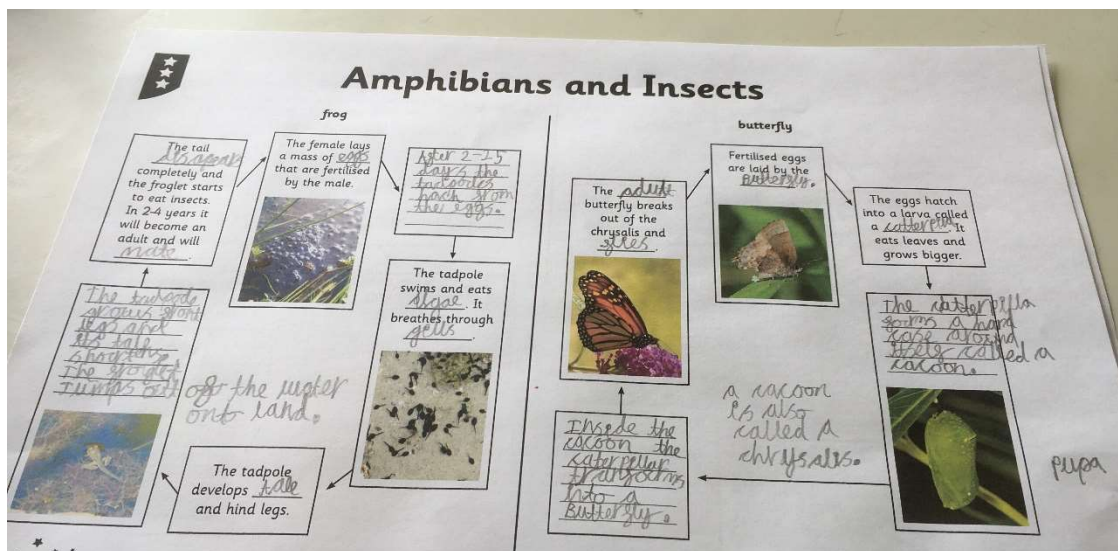
$32 = 4 \times \text{☆}$

♥ = 10 ☆ = 8 ▲ = 5

Work out the missing total of each row and column. Compare answers with a partner.



A brilliant arithmetic mark from Kirby this week – well done. He has also been baking bread which looks delicious. I hope it tasted good!



Lots of great work from Nathan this week. You are working really hard – I'm glad you found enough time to go on a bike ride.

1. What fraction of each square has been shaded?

Write each number as a fraction and as a decimal.

a) fraction = $\frac{37}{100}$ decimal = 0.37

b) fraction = $\frac{50}{100}$ decimal = 0.5

2. Show that $\frac{400}{1000}$ is the same as 0.4

$\frac{400}{1000} = \frac{400 \div 100}{1000 \div 100} = \frac{4}{10} = 0.4$

3. Write the numbers represented by the place value charts.

a)

Ones	Tenths	Hundredths	Thousandths
4	2	7	6

 4.276

b)

Ones	Tenths	Hundredths	Thousandths
0	5	0	4

 0.504

4. Colour the grids to represent the fraction and decimal.

a) $\frac{73}{1000}$ 302

b) 0.302



Saint Cuthbert

Questions

- Summarise Cuthbert's early life.
Cuthbert was born in Northumbria in the North of England around the year AD 635.
- Who was Aidan and how was his life connected to Cuthbert?
Aidan was an Irish monk who then became a saint.
- What is a prior and when did Cuthbert first become one?
He became one in AD 664. A prior is a monk who is responsible for looking after a monastery.
- Why did Cuthbert move to become prior at Lindisfarne?
He became a prior because his friend and teacher were dying and he knew he had to take over.
- What evidence is there to suggest that Cuthbert was a good spiritual leader?
He is well known now and is famous.
- What did Cuthbert see happening in a vision and what do you think people thought about him when they heard about this?
He thought he saw a) people go to heaven b) didn't believe him.
- Why does Cuthbert's story not end with his death?
Because he became a saint when he died.
- According to the story, what is unusual about the remains of Saint Cuthbert after his death?
The monks decided to recover Cuthbert's remains.
- Describe in detail the event that led to the monks leaving the monastery at Lindisfarne.
The Vikings attacked the island and took it.
- Where are Cuthbert's remains buried today?
Saint Cuthbert's body was buried in a plain grave in a cathedral.